



EXAMINATIONS COUNCIL OF ESWATINI
Eswatini Primary Certificate

CANDIDATE
NAME

--

CENTRE
NUMBER

--	--	--	--

CANDIDATE
NUMBER

--	--	--	--

EXPRESSIVE ARTS

641/01

Paper 1

For examination from 2025 - 2027

SPECIMEN

2 hours

Candidates answer on the Question Paper.

READ THESE INSTRUCTIONS FIRST

Write your name, centre number and candidate number on the spaces provided.
Write your answers using a **dark blue** or **black pen** in the spaces provided.
Do **not** use tipp-ex for erasing.

This paper consists of **five (5)** sections; (**A, B, C, D** and **E**).

Answer all questions in sections **A, B, C, D** and **E**.

All drawings, graphs and tables should be done in pencil.

The number of marks is given in [] at the end of each question.

For Examiner's Use	
Section A	
Section B	
Section C	
Section D	
Section E	
Total	

This document consists of **13** printed pages and **3** blank page.

SECTION A
VISUAL ARTS

QUESTION 1

(a) State any **two** types of lines

(i)

(ii) [2]

(b) Give **two** uses of lines in drawing

(i) [1]

(ii) [1]

(c) Define a landscape

.....

..... [1]

(d) Name **two** examples of the following colours:

Primary Colours	Secondary Colours
1.....	1.....
2.....	2.....

(e) Explain how you can make a:

Tint

..... [1]

Shade

..... [1]

(f) Study the picture below and answer the questions that follow:



(i) What is the artist in the picture above doing?

..... [1]

(ii) State **one** tool used by the person above

..... [1]

(iii) Name **two** materials used by the artist in the picture

..... [2]

(g) What are concentric circles?


.....
..... [1]

(h) On the space below:

(i) Draw **three** concentric circles [1]

(ii) Show their centre. [1]

(iii) Use your pencil to shade the circles and create a monochrome [2]



Total: 20 Marks

SECTION B

DRAMA

Question 2

(a) State the facial expressions one could show when experiencing the following situations:


(i) When your mother bought you a bicycle

..... [1]

(ii) When you failed your Maths test

..... [1]

(ii) On the space below, draw and name any other facial expression that can be expressed in (ii) above.



Name

[3]

(b) Define the following terms:

Stage props..... [2]

Setting.....[2]

(c) Explain the importance of drama.

.....

..... [2]

(d) Where does a story line come from?

- 1.....
.....
- 2.....
.....[2]

(e) Study the picture below:



- 1 What is the name of the picture shown above?

..... [1]

- 2 Explain the storyline of the above picture.

.....
.....
.....
.....
..... [2]

6

(f) Write the names of the clowns shown in the pictures below:



Picture A



Picture B

A.....

B..... [2]

(g) Explain the importance of role playing.

.....

..... [2]

[Total: 20 Marks]

SECTION C**MUSIC**

(a) Name the first **two** musical note on the octave.

..... [1]

(b) Write **two** ways of singing the tonic solfa.

(i) [1]

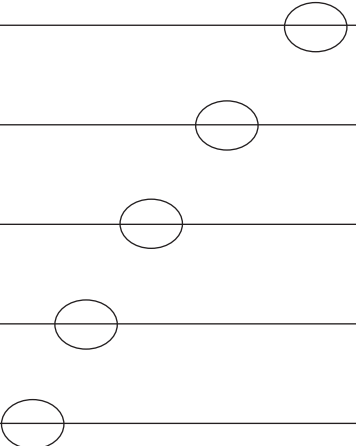
(ii) [1]

(c) State the **two** major scales and their notes or pitches:

Name of Major Scale	Notes/pitches of the major scale

[2]

(d) Study the diagram below and label it with the correct musical notes on the circles.

		E
		C
		A
		F

[5]

(e) Match the following words with their correct definitions:


Word	Definition
Dynamics	Highness and lowness of sounds
Tempo	Loudness and softness of sounds
Pitch	Fastness and slowness of sounds

[5]

(f) On the space below draw the following:

<u>Whole note</u>	<u>Bass Cleff</u>	<u>Half Note</u>
[1]	[1]	[1]

(g) Draw, name and colour a musical instrument of your choice in the space provided. [4]




[Total: 20 Marks]

(f) On the space below draw the following:

<u>Whole note</u>	<u>Bass Cleff</u>	<u>Half Note</u>
[1]	[1]	[1]

(g) Draw, name and colour a musical instrument of your choice in the space provided. [4]



[Total: 20 Marks]

10
SECTION D
DANCE

Question 3

(a) Write **one** costume you would need for dancing.

.....[1]

(b) Match the following words with the correct definition:

Word	Definition
Energy	A dance move with three steps across the floor
Grape vine dance	Action made by a dancer
	Is how the movement of a dancer happens

(c) State **two** examples of modern and traditional dances.

Modern Daces	Traditional Dances
1	1
2	2

(i) Choose one traditional dance that you stated above and suggest any musical instrument you can play during the dance.


Name of dance

..... [1]

Musical instrument played

..... [2]

- (d) Study the picture below, state its name and the instrument played during the dance:



Name of dance

..... [1]

name and describe **a musical instrument played for the dance name**

..... [1]

- (i) Suggest **two** things to consider when preparing for the dance above.

1

.....

2

..... [2]

- (ii) Give **two** elements of dance.

1

2 [2]

- (c) Describe **one** choreography principle

1

.....

2

..... [2]

[Total: 20 Marks]

SECTION E
BUSINESS

(a) What is money?

.....
..... [1]

(b) Write **two** examples of things you buy daily using money.

1
2
[2]

(c) What are services?

.....
..... [1]

(d) Name **two** examples of services.

1
2
[2]

(e) List any **two** things to consider when planning to start a business.

1
2
[2]

(f) Define the following terms:

(i) Budget
..... [1]

(ii) Saving
..... [1]

(iii) Profit
..... [1]

(g) Study the pictures below and answer the questions that follow:



Figure A



Figure B

(h) State the names of the businesses shown in the pictures.

Figure A

Figure B [2]

(ii) From the picture above, give the business that provides services and goods.

Business providing services	Business providing goods

(iii) Suggest any **two** examples of goods that can be sold by one of the businesses above.

.....
 [2]

(iv) What do we call the people who buy goods and pay for services from a business?

.....
 [1]

(f) Explain the importance of money

.....
 [2]

[Total: 20 Marks]

BLANK PAGE

BLANK PAGE

BLANK PAGE

Permission to reproduce items where third-party owned material protected by copyright is included has been sought and cleared where possible. Every reasonable effort has been made by the publisher (ECESWA) to trace copyright holders, but if any terms requiring clearance have unwittingly been included, the publisher will be pleased to make amends at the earliest possible opportunity.